

Pre-Calculus Test 7th Review

Please complete the indicated problems from each section on your review (it will count as a quiz grade). Your review is due the day of the test (A day: _____, B day: _____). You are responsible for this content whether or not you in class at the time. See www.CalcChat.com (Chapter 5:Section Review) for worked out solutions to odd numbered exercises.

4.2

Finding a Point on the Unit Circle In Exercises 41–48, find the point (x, y) on the unit circle that corresponds to the real number t .

41. $t = \frac{7\pi}{4}$

42. $t = \frac{3\pi}{4}$

43. $t = \frac{5\pi}{6}$

44. $t = \frac{4\pi}{3}$

45. $t = \frac{2\pi}{3}$

46. $t = \frac{7\pi}{6}$

47. $t = \frac{5\pi}{4}$

48. $t = \frac{5\pi}{6}$

Evaluating Trigonometric Functions In Exercises 85–90, the point is on the terminal side of an angle in standard position. Determine the exact values of the six trigonometric functions of the angle.

85. $(12, 16)$

86. $(2, 10)$

87. $(-7, 2)$

88. $(3, -4)$

89. $(\frac{2}{3}, \frac{5}{8})$

90. $(-\frac{10}{3}, -\frac{2}{3})$

Evaluating Trigonometric Functions In Exercises 91–94, find the values of the other five trigonometric functions of θ satisfying the given conditions.

91. $\sec \theta = \frac{6}{5}, \tan \theta < 0$ 92. $\tan \theta = -\frac{12}{5}, \sin \theta > 0$

93. $\sin \theta = \frac{3}{8}, \cos \theta < 0$

94. $\cos \theta = -\frac{2}{5}, \sin \theta > 0$

Finding a Reference Angle In Exercises 95–102, find the reference angle θ' . Sketch θ in standard position and label θ' .

95. $\theta = 330^\circ$

96. $\theta = -240^\circ$

97. $\theta = \frac{5\pi}{4}$

98. $\theta = -\frac{9\pi}{4}$

99. $\theta = 264^\circ$

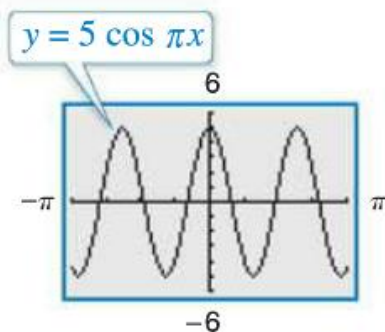
100. $\theta = 635^\circ$

101. $\theta = -\frac{6\pi}{5}$

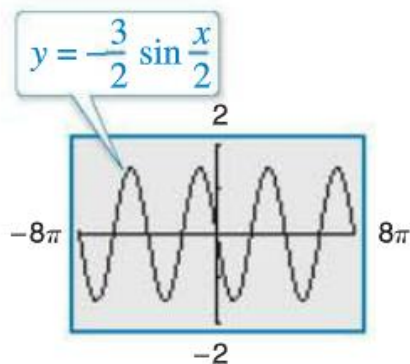
102. $\theta = \frac{17\pi}{3}$

Finding the Period and Amplitude In Exercises 119–122, find the period and amplitude.

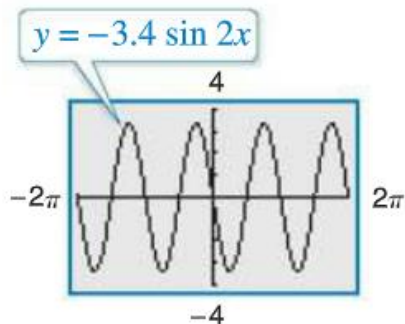
119.



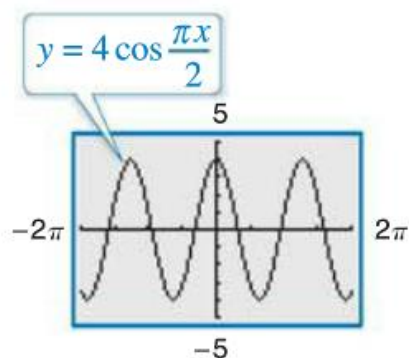
120.



121.



122.



Graphing Sine and Cosine Functions In Exercises 123–134, sketch the graph of the function. (Include two full periods.)

123. $f(x) = 3 \cos 2\pi x$

124. $f(x) = -2 \sin \pi x$

125. $f(x) = 5 \sin \frac{2x}{5}$

126. $f(x) = 8 \cos\left(-\frac{x}{4}\right)$

127. $f(x) = -\frac{5}{2} \cos \frac{x}{4}$

127. $f(x) = -\frac{5}{2} \cos \frac{x}{4}$

128. $f(x) = -\frac{1}{2} \sin \frac{\pi x}{4}$

129. $f(x) = \frac{5}{2} \sin(x - \pi)$

130. $f(x) = 3 \cos(x + \pi)$

131. $f(x) = 2 - \cos \frac{\pi x}{2}$

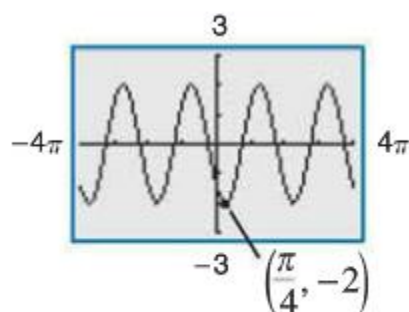
132. $f(x) = \frac{1}{2} \sin \pi x - 3$

133. $f(x) = -3 \cos\left(\frac{x}{2} - \frac{\pi}{4}\right)$

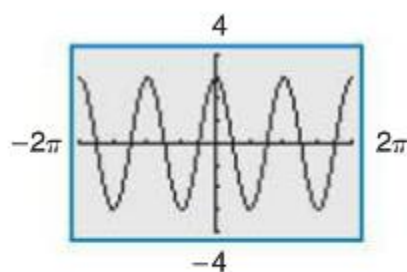
134. $f(x) = 4 - 2 \cos(4x + \pi)$

Finding an Equation of a Graph In Exercises 135–138, find a , b , and c for the function $f(x) = a \cos(bx - c)$ such that the graph of f matches the graph shown.

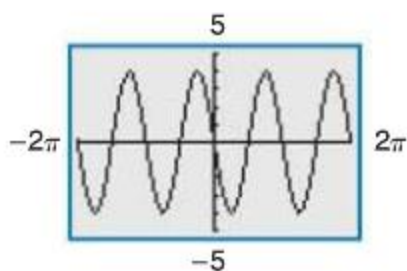
135.



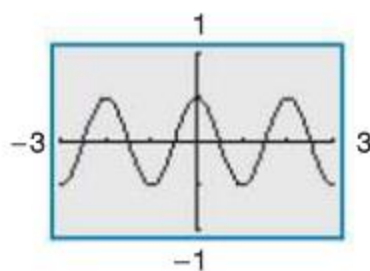
136.



137.



138.



4.6



Library of Parent Functions In Exercises 141–154, sketch the graph of the function. (Include two full periods.)

141. $f(x) = -\tan \frac{\pi x}{4}$

142. $f(x) = 4 \tan \pi x$